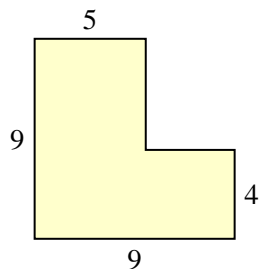




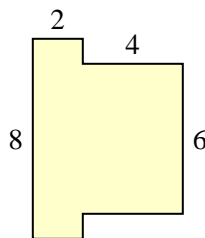
Find the total area of each shape. Measurement is in millimeters (mm). Not to scale.

Answers

1)



2)

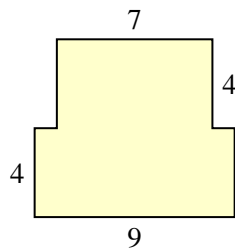


1. \_\_\_\_\_

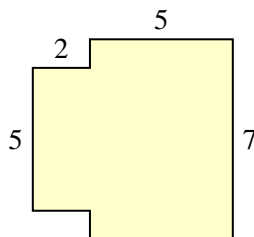
2. \_\_\_\_\_

3. \_\_\_\_\_

3)



4)

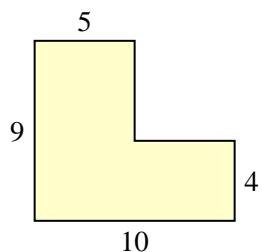


4. \_\_\_\_\_

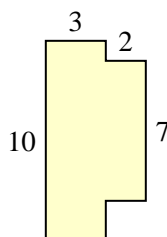
5. \_\_\_\_\_

6. \_\_\_\_\_

5)



6)



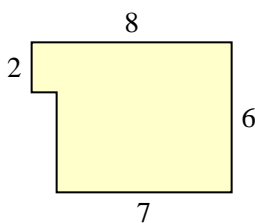
7. \_\_\_\_\_

8. \_\_\_\_\_

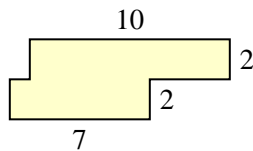
9. \_\_\_\_\_

10. \_\_\_\_\_

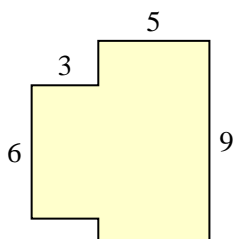
7)



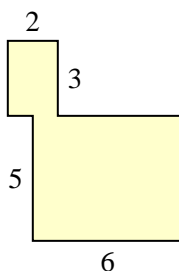
8)



9)

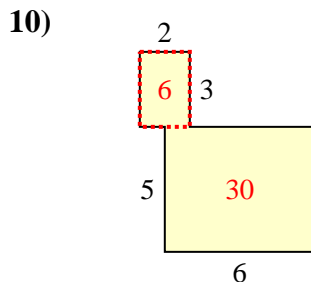
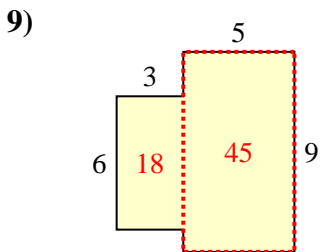
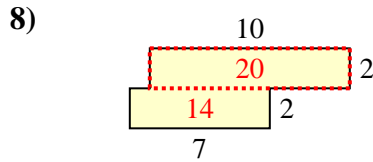
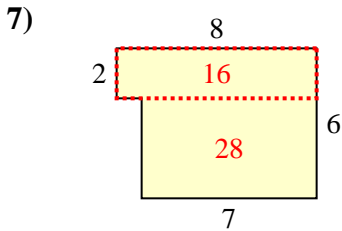
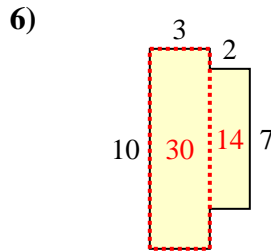
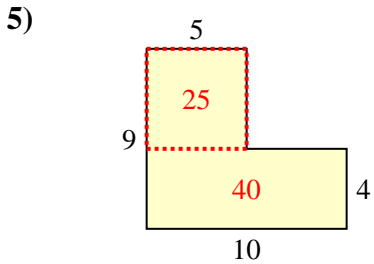
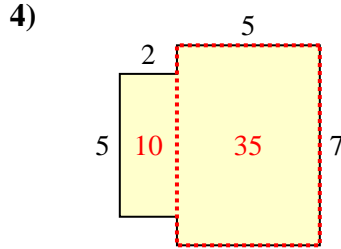
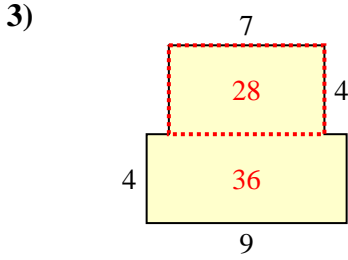
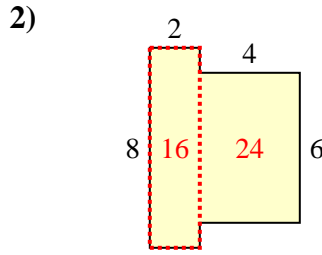
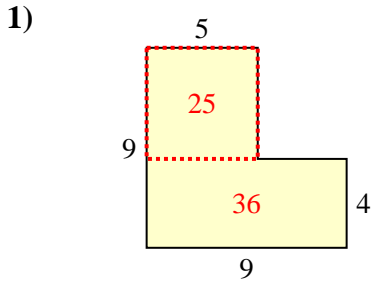


10)





Find the total area of each shape. Measurement is in millimeters (mm). Not to scale.



Answers

1. 61 mm<sup>2</sup>
2. 40 mm<sup>2</sup>
3. 64 mm<sup>2</sup>
4. 45 mm<sup>2</sup>
5. 65 mm<sup>2</sup>
6. 44 mm<sup>2</sup>
7. 44 mm<sup>2</sup>
8. 34 mm<sup>2</sup>
9. 63 mm<sup>2</sup>
10. 36 mm<sup>2</sup>